

LUNDI MARDI MERCREDI JEUDI VENDREDI SAMEDI DIMANCHE

La solution de la grille 2

| | | | | | |
|-------------------|-------------------|-------------------|--------------------|-------------------|----|
| $2 \times 3 = 6$ | 12 | 1 | 5 | 9 | 1 |
| 5 | 9 | 11 | 3 | $2 \times 8 = 16$ | |
| $2 \times 9 = 18$ | 3 | 14 | 4 | 5 | 7 |
| 1 | 4 | 0 | $2 \times 10 = 20$ | 8 | 8 |
| 7 | 2 | $2 \times 1 = 2$ | 1 | $2 \times 4 = 8$ | 10 |
| 3 | $2 \times 2 = 4$ | 10 | 10 | 4 | 11 |
| 9 | 2 | 4 | 20 | 8 | 8 |
| 12 | $2 \times 5 = 10$ | 9 | | | |
| 19 | 4 | $2 \times 7 = 14$ | 8 | 4 | 9 |

LUNDI MARDI MERCREDI JEUDI VENDREDI SAMEDI DIMANCHE

La solution de la grille 5

| | | | | | |
|-------------------|-------------------|--------------------|-------------------|--------------------|----|
| $5 \times 2 = 10$ | $5 \times 7 = 35$ | 1 | 1 | 9 | 1 |
| 9 | 9 | 3 | 3 | $5 \times 6 = 30$ | 16 |
| 3 | $5 \times 8 = 40$ | 4 | 4 | 4 | 7 |
| 1 | $5 \times 1 = 5$ | $5 \times 10 = 50$ | 5 | $5 \times 10 = 50$ | 8 |
| 18 | 7 | 5 | 2 | 1 | 10 |
| 6 | $5 \times 3 = 15$ | 2 | 2 | $5 \times 9 = 45$ | 11 |
| 12 | 9 | $5 \times 4 = 20$ | $5 \times 4 = 20$ | 8 | 8 |
| 19 | $5 \times 5 = 25$ | 14 | 14 | 8 | 9 |

La solution de la grille 3

| | | | | | | | |
|----|----|----|----|----|----|----|----|
| 3 | 5 | 3 | 7 | 21 | 7 | 2 | 16 |
| 3 | 4 | 1 | 22 | 3 | 4 | 12 | 5 |
| 9 | 6 | 5 | 35 | 13 | 26 | 17 | 0 |
| 14 | 2 | 3 | 9 | 3 | 10 | 30 | 1 |
| 3 | 11 | 2 | 14 | 32 | 19 | 12 | 4 |
| 8 | 36 | 6 | 8 | 1 | 3 | 6 | 18 |
| 24 | 1 | 0 | 9 | 5 | 7 | 29 | 10 |
| 3 | 5 | 15 | 4 | 3 | 9 | 27 | 9 |

La solution de la grille 4

| | | | | | | | |
|----|----|----|----|----|----|----|----|
| 3 | 5 | 4 | 9 | 36 | 7 | 2 | 4 |
| 3 | 6 | 4 | 4 | 16 | 3 | 4 | 12 |
| 9 | 5 | 5 | 35 | 13 | 4 | 1 | 17 |
| 4 | 2 | 3 | 9 | 3 | 4 | 30 | 1 |
| 5 | 11 | 4 | 2 | 8 | 4 | 7 | 28 |
| 20 | 4 | 6 | 8 | 1 | 3 | 6 | 4 |
| 24 | 8 | 0 | 9 | 5 | 7 | 29 | 10 |
| 3 | 32 | 15 | 4 | 3 | 12 | 27 | 40 |

Nombres et quantités : de 0 à 999



1 Encadre le nombre entre deux dizaines qui se suivent:

| | | | | | | | | |
|-----|-----|-----|-----|-----|-----|-----|-----|-----|
| 450 | 452 | 460 | 480 | 488 | 490 | 60 | 68 | 70 |
| 180 | 185 | 190 | 640 | 645 | 650 | 420 | 426 | 430 |
| 810 | 815 | 820 | 310 | 312 | 320 | 770 | 778 | 780 |

2 Colorie en bleu les unités, en rouge les dizaines et en vert les centaines

| | | | | | |
|-----|-----|-----|-----|-----|-----|
| 912 | 198 | 4 | 19 | 109 | 589 |
| 719 | 46 | 127 | 159 | 167 | 919 |

3 Ecris les nombres dans l'ordre croissant, du plus petit au plus grand:

505 - 395 - 400 - 64 - 51 - 664 - 550

| | | | | | | |
|----|----|-----|-----|-----|-----|-----|
| 51 | 64 | 395 | 400 | 505 | 550 | 664 |
|----|----|-----|-----|-----|-----|-----|

4 Dessine :

| | | | |
|-----|--|-----|--|
| 123 | | 354 | |
| 405 | | 260 | |

Prénom : _____


Date: _____

Nombres et quantités : de 0 à 999

 $3 < 15$


1 Complète avec $<$, $>$ ou $=$:

202




100 + 20

467



400 + 70

338



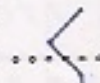
300 + 80 + 8

630




600 + 30

256



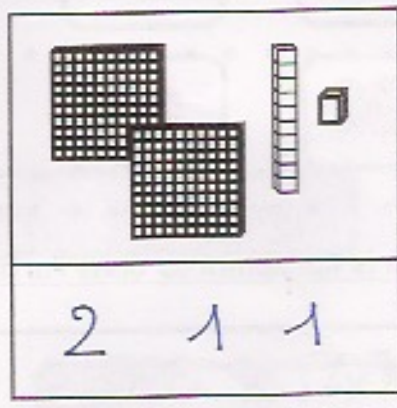
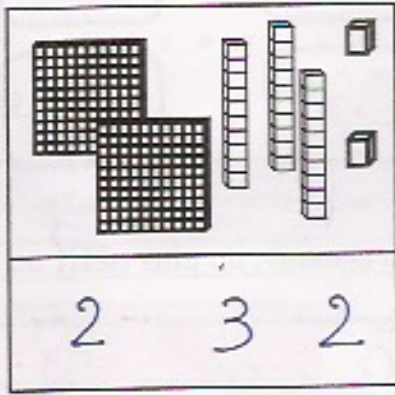
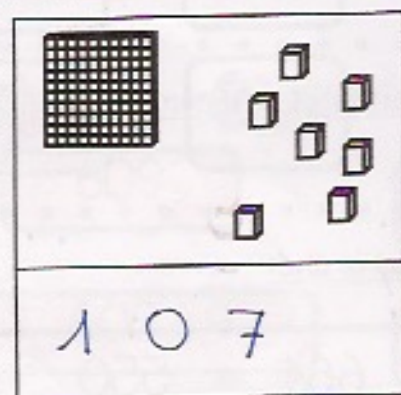
300 + 60 + 5

375



100 + 100 + 100

2 Compte et complète :



3 Ecris les nombres du plus grand au plus petit:

655 - 816 - 565 - 154 - 96 - 810 - 500

816

810

655


565

500

154

96

4 Complète :



Nombres et quantités : de 0 à 999

3 < 15



1 Complète avec <, > ou =:

252

..<..

trois - cent - deux

477

..<..

cinq - cent - dix

28

..<..

cent - huit

803

..=..

huit - cent - trois

536

..>..

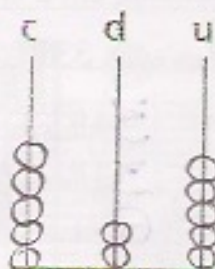
cinq - cent

465

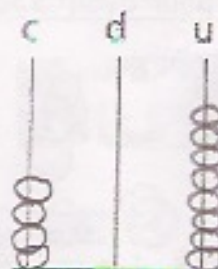
..>..

cent - soixante

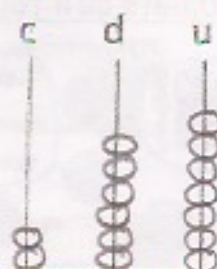
2 Complète les abaques :



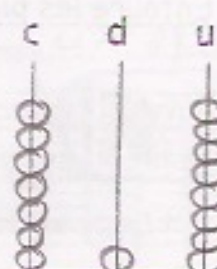
525



408



267




718

3 Complète le tableau :

| | | |
|-----|----------------|----------------|
| 827 | $800 + 20 + 7$ | $8c + 2d + 7u$ |
| 565 | $500 + 60 + 5$ | $5c + 6d + 5u$ |
| 959 | $900 + 50 + 9$ | $9c + 5d + 9u$ |
| 282 | $200 + 80 + 2$ | $2c + 8d + 2u$ |
| 709 | $700 + 9$ | $7c + 9u$ |

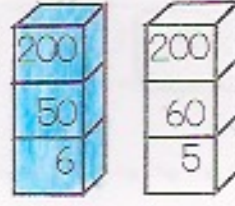
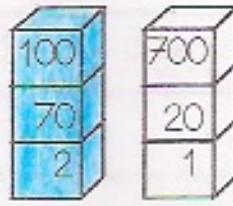
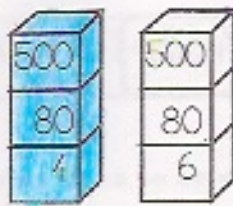
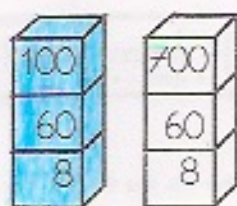
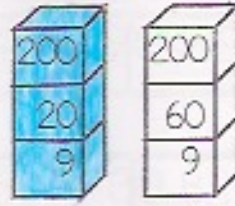
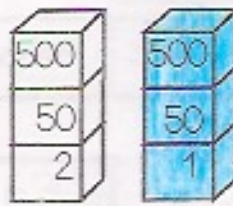
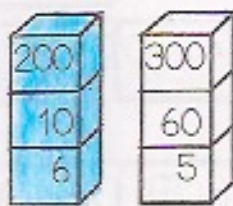
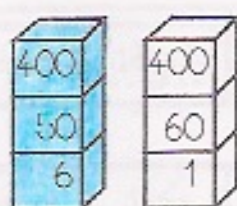
4 Complète :




Nombres et quantités : de 0 à 999



1 Colorie la pile qui représente le plus petit nombre:




2 Entoure les pièces et billets qu'il faut choisir pour avoir 336€ :



Pour avoir 336€, il faut :

| | |
|---|------------------|
| 3 | billets de 100 € |
| 3 | billets de 10 € |
| 6 | pièces de 1 € |

3 Relie les nombres à leur place sur la droite graduée :



4 Complète :

