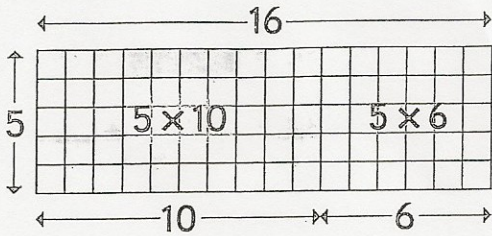


Calculer un produit en utilisant la distributivité

1 Léa calcule 5×16 . Aide-la à terminer son calcul.

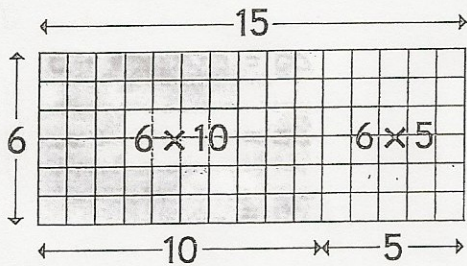


$$5 \times 16 = 5 \times 10 + 5 \times 6$$

$$5 \times 16 = 50 + 30$$

$$5 \times 16 = 80$$

2 Théo calcule 6×15 . Aide-le à terminer son calcul.

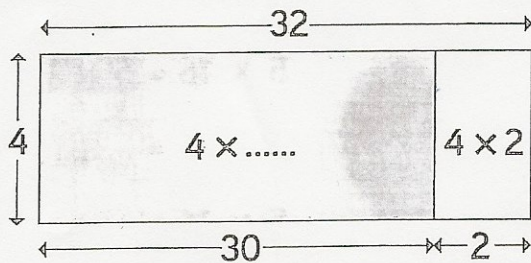


$$6 \times 15 = 6 \times 10 + 6 \times 5$$

$$6 \times 15 = 60 + 30$$

$$6 \times 15 = 90$$

3 Complète le schéma et calcule 4×32 .

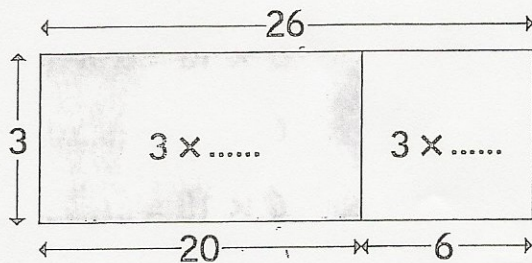


$$4 \times 32 = 4 \times 30 + 4 \times 2$$

$$4 \times 32 = 120 + 8$$

$$4 \times 32 = 128$$

4 Complète le schéma et calcule 3×26 .



$$3 \times 26 = 3 \times 20 + 3 \times 6$$

$$3 \times 26 = 60 + 18$$

$$3 \times 26 = 78$$