
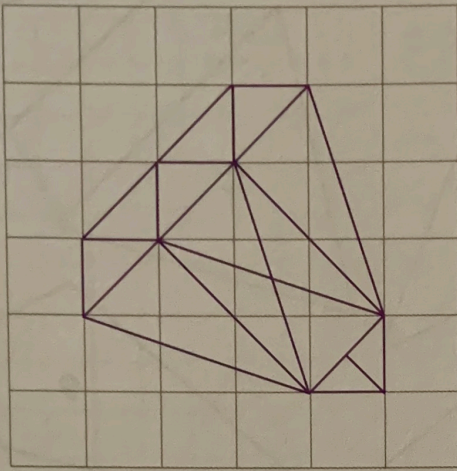



1 Reproduis la figure suivante.




2 Lis les consignes, puis trace.


a. Trace un triangle équilatéral ABC.



Utilise ton compas !



b. Trace un triangle isocèle EFG.



c. Trace un triangle IJK, rectangle en K.



d. Trace un triangle isocèle XYZ, rectangle en Y.

